



Name \_\_\_\_\_

▲ Divide. Draw the sets for each problem.

$15 \div 5 =$

$35 \div 5 =$

$12 \div 3 =$

$40 \div 5 =$

$20 \div 5 =$


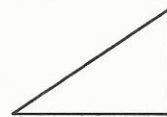

$45 \div 5 =$

$28 \div 4 =$

$5 \div 5 =$

$25 \div 5 =$

▲ Label each figure. Trace all right angles with red. Trace each acute angle with green. Trace the obtuse angles with blue.



▲ Write the expanded form of each number.

189,375 \_\_\_\_\_

4,711 \_\_\_\_\_

36,729 \_\_\_\_\_

842 \_\_\_\_\_



**Bonus Box:** Write ten number sentences with an answer of 8. Include addition, subtraction, multiplication, and division problems.