

Name \_\_\_\_\_

Date \_\_\_\_\_

Time \_\_\_\_\_

# Frames and Arrows

Home Link  
1.11



You can find information about Frames-and-Arrows diagrams on pages 176 and 177 in the *Student Reference Book*.

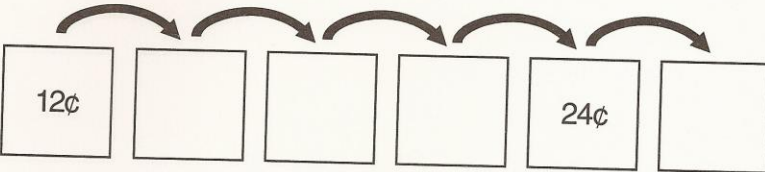
Please return this Home Link to school tomorrow.



Show someone at home how to complete these Frames-and-Arrows diagrams.

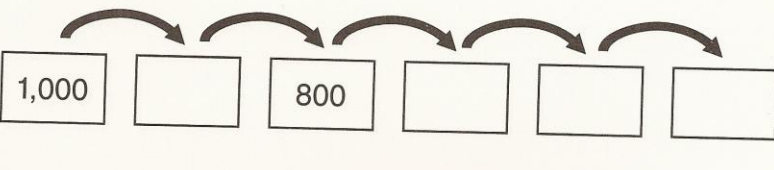
1. 

Rule
+ 3¢



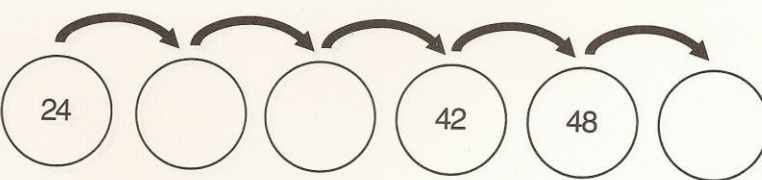
2. 

Rule
- 100



3. 

Rule



## Review

Write each amount in dollars-and-cents notation.

4.  $\boxed{\$1} \text{ Q } \text{D} \text{N} \text{N} \text{P} = \$$  \_\_\_\_\_

5.  $\text{D} \text{D} \text{Q} \text{N} \text{P} \text{D} \text{Q} \text{P} = \$$  \_\_\_\_\_

6.  $\boxed{\$10} \boxed{\$1} \boxed{\$1} \text{N} \text{P} = \$$  \_\_\_\_\_

7. Draw coins to show \$0.89 in at least two different ways.